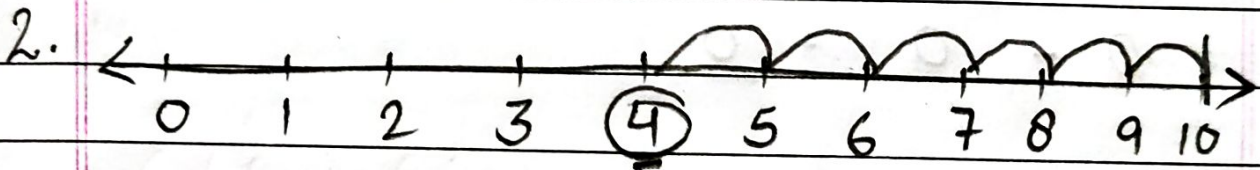
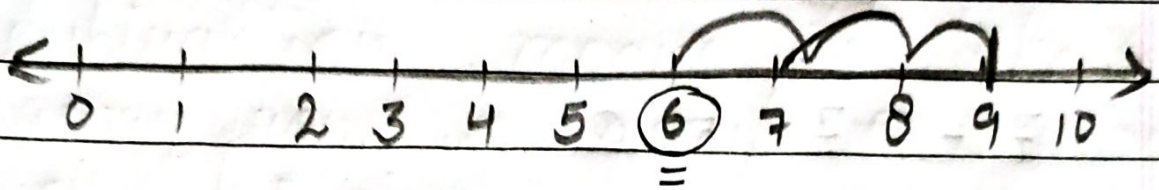
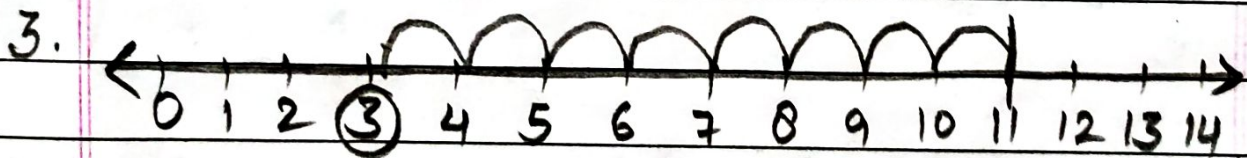


A Subtract using the number line and find the difference.

1  $9 - 3 = 6$



$$10 - 6 = 4$$



$$11 - 8 = 3$$

C.

Subtract these numbers.  
(without regrouping)

a) 
$$\begin{array}{r} T \quad O \\ 4 \quad 7 \\ - 0 \quad 3 \\ \hline 4 \quad 4 \end{array}$$

b) 
$$\begin{array}{r} T \quad O \\ 8 \quad 3 \\ - 0 \quad 3 \\ \hline 8 \quad 0 \end{array}$$

c) 
$$\begin{array}{r} T \quad O \\ 4 \quad 5 \\ - 2 \quad 4 \\ \hline 2 \quad 1 \end{array}$$

d) 
$$\begin{array}{r} T \quad O \\ 4 \quad 4 \\ - 2 \quad 1 \\ \hline 2 \quad 3 \end{array}$$

e) 
$$\begin{array}{r} T \quad O \\ 8 \quad 4 \\ - 6 \quad 3 \\ \hline 2 \quad 1 \end{array}$$

f) 
$$\begin{array}{r} T \quad O \\ 8 \quad 9 \\ - 3 \quad 6 \\ \hline 5 \quad 3 \end{array}$$