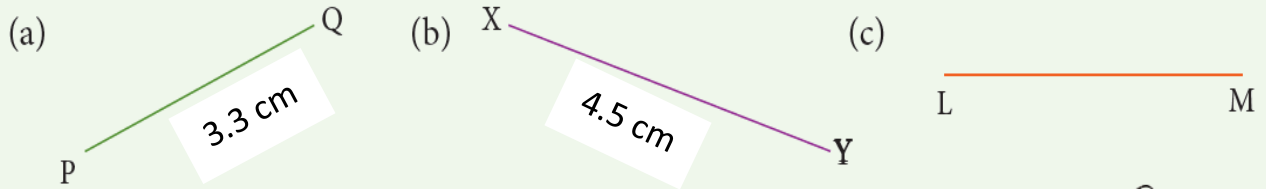


Do this Q1. in  
book only



## Self Practice 11B

1. Measure the length of the following line segments.




**Q1. (c) part is homework**

Do this Q2. in copy

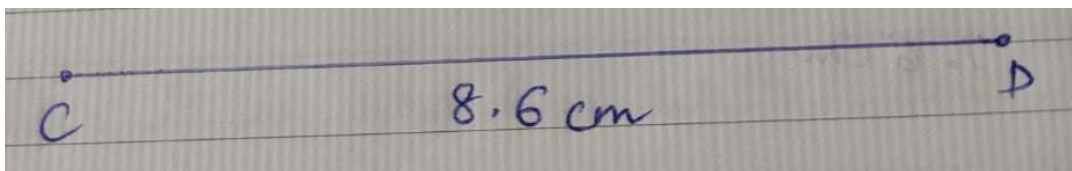
2. Draw the line segments of the given lengths, using a ruler.

- (a) 7.2 cm      (b) 8.6 cm      (c) 6.3 cm


**Solution2:-** (a) 7.2



(b) 8.6 cm



(c) 6.3 cm



**Q3. is omitted**