

## EXERCISE 5

### EXERCISE-5

A. Tick (✓) the right option.

- Berlin is situated on the riverbank of:  
a. Tigris       b. La Plata       c. Spree
- Cairo is situated on the riverbank of:  
a. La Plata       b. Nile       c. Liffey
- Lahore is situated on the riverbank of:  
a. Ravi       b. Liffey       c. Tagus
- London is situated on the riverbank of:  
a. Moskva       b. Tagus       c. Thames
- New York is situated on the riverbank of:  
a. Hudson       b. Seine       c. Tiber

B. Which industry is associated with following Indian cities?

1. Aligarh

Locks

2. Bhilai

Steel

3. Jharia

Coal Mines

4. Kolar

Gold mines

5. Mirzapur

Carpets

C. Which industry is associated with following world cities?

- 1. Detroit
- 2. Leeds
- 3. Milan
- 4. Tehran
- 5. Venice

**Automobiles**

**Woollen garments**






**Silk**

**Carpets**

**Glass**

D. Match the following.

- 1. Austria
- 2. Zimbabwe
- 3. Norway
- 4. Thailand
- 5. Turkey

- a.  2
- b.  4
- c.  1
- d.  5
- e.  3