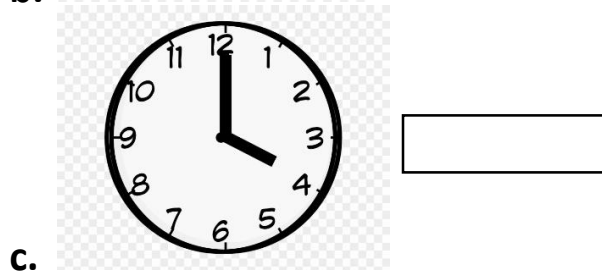
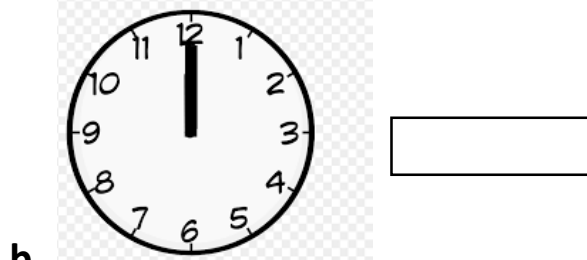



Revision Worksheet 7



1. Read the time of given clock and write in boxes:



2. Draw clocks for given time:
- a. 9 o'clock
 - b. 7 o'clock
 - c. 3 o'clock