



Class-1

Subject- Maths


Chapter-2 Measurement

Exercise 2 (Kindly note down in copy.)

Q.1 Tick (v) the heavier one.



Q.2 Circle the lighter object.



Q.3 Tick (✓) the thinner candle.

