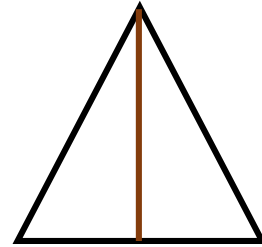

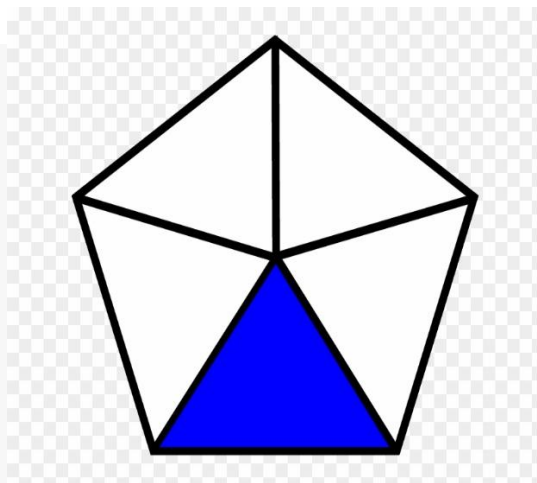
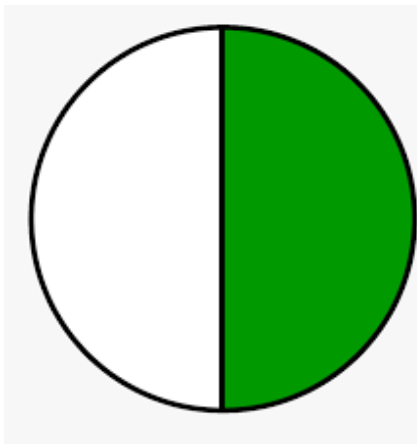


Class -1
Subject- Maths
Revision 8

Q.1 Shade $\frac{1}{2}$ of the following figure.



Q.2 Write $\frac{1}{2}$ or $\frac{1}{4}$.



()

()

Q.3 Write 12 months of the year.
