

Revision 1 MCQ for Periodical 1

Class - 1

Subject - Maths

Q. I Choose the correct option .

1. How many birds are in the nest?




- a. 2 ( )      b. 3 ( )      c. 5 ( )

2. How many triangles are below? count them.




- a. 7 ( )      b. 8 ( )      c. 5 ( )

3. Who is standing before Jill ?



- a. Millie ( )      b. Jack ( )      c. No one ( )

4. How many numbers are shown on the fingers?

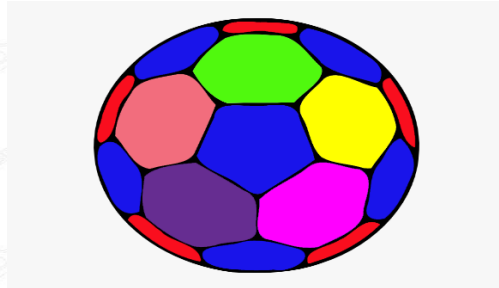


a. 10 ( )

b. 5 ( )

c. 9 ( )

5. Which object is just before of the ball?



a. bat ( )

b. ball ( )

c. dog ( )

6. Which number will come before \_\_\_\_ 64 ?

a. 63 ( )

b. 70 ( )

c. 65 ( )

7. Which number comes after 29 \_\_\_\_ ?

a. 31 ( ) b. 30 ( ) c. 28 ( )

8. The number name of 38 is-

a. Thirty three ( )

b. Thirty two ( )

c. Thirty eight ( )

9. When we write numbers in terms of tens and ones are called ?

a. short form ( )

b. expanded form ( )

c. abacus ( )

10. When numbers are arranged from the greatest numbers to the smallest numbers are called ?

a. descending order ( )

b. ascending order ( )

c. addition ( )

---

ANSWER KEY : --

1. ( b ) 3

2. ( c ) 5

3. ( b ) Jack

4. ( c ) 9

5. ( a ) bat

6. ( a ) 63

7. ( b ) 30

8. ( c ) Thirty eight

9. ( b ) expanded form

10. ( c ) addition