

Revision 1 MCQ for Periodical 1

Class - 1

Subject - Maths.

Choose the correct option .

1. How many birds are in the nest?




- a. 2 () b. 3 () c. 5 ()

2. How many triangles are below? count them.




- a. 7 () b. 8 () c. 5 ()

3. Who is standing before Jill ?



- a. Millie () b. Jack () c. No one ()

4. How many numbers are shown on the fingers?

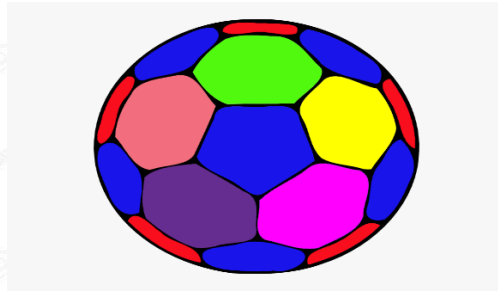


a. 10 ()

b. 5 ()

c. 9 ()

5. Which object is just before of the ball?



a. bat ()

b. ball ()

c. dog ()

6. Which number will come before ____ 64 ?

a. 63 ()

b. 70 ()

c. 65 ()

7. Which number comes after 29 ____ ?

a. 31 ()

b. 30 ()

c. 28 ()

8. The number name of 38 is-

a. Thirty three () b. Thirty two () c. Thirty eight ()

9. When we write numbers in terms of tens and ones are called ?

a. short form ()

b. expanded form ()

c. abacus ()

10. When numbers are arranged from the greatest numbers to the smallest numbers are called ?

a. descending order ()

b. ascending order ()

c. addition ()

ANSWER KEY : --

1. (b) 3

2. (c) 5

3. (b) Jack

4. (c) 9

5. (a) bat

6. (a) 63

7. (b) 30

8. (c) Thirty eight

9. (b) expanded form

10. (a) descending order