
















# Grade II EVS

## Natural and man-made objects



Objects that occur in nature are called natural objects.  
Objects that are made by man are called man-made objects.

Identify if the objects are natural or man-made. Put 'N' for natural and 'M' for man-made objects.

1. A car is filled with petrol and it moves. Can you call it a living object?  
Give three points to support your answer.

- A. \_\_\_\_\_
- B. \_\_\_\_\_
- C. \_\_\_\_\_



**Classify the items given below into Living and Non-Living and write in correct column:**

CAT	MOBILE	TABLE	CHILD
PIZZA	LION	COMPUTER	TEDDY BEAR
PARROT	BOOK	BURGER	TULSI PLANT

<b>LIVING THING</b>	<b>NON-LIVING THING</b>

**ANSWER KEY**

<b>LIVING THING</b>	<b>NON-LIVING THING</b>
Cat	Pizza
Parrot	Mobile
Lion	Book
Child	Table
Tulsi plant	Computer
	Teddy bear